




Quiz for Older Primary Students



Questions	Answers
<p>1. Name 3 types of clouds by filling in the blanks.</p>	<p>C _ RR _ S</p> <p>C _ MUL _ S</p> <p>STR _ T _ S</p>
<p>2. How many minutes does it take for sunlight to reach Earth?</p>	<p>_____ minutes</p>
<p>3. What does an anemometer measure?</p>	<p>a) _____</p> <p>b) _____</p> 
<p>4. Name the first stage of the Water Cycle.</p>	<p>_____</p>
<p>5. Convert 20°C into Fahrenheit</p> <p>HINT: $T_C = (T_F - 32) \div 1.8$</p> <p>$T_F = (T_C \times 9/5) + 32$</p>	
<p>6. Which travels faster; thunder or lightning? Tick the box</p>	<p>Thunder <input type="checkbox"/></p> <p>Lightning <input type="checkbox"/></p>  
<p>7. Where do Irish meteorologists gather information about the weather?</p> <p>Name 3 sources.</p>	<p>a) _____</p> <p>b) _____</p> <p>c) _____</p>
<p>8. What type of weather is associated with low pressure (L)?</p>	
<p>9. Name 3 ways we can help reduce Global Warming.</p>	<p>a) _____</p> <p>b) _____</p> <p>c) _____</p>
<p>10. List 2 ways scientists can measure climate change.</p>	<p>a) _____</p> <p>b) _____</p>